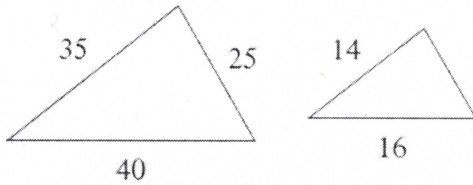


TARGET C

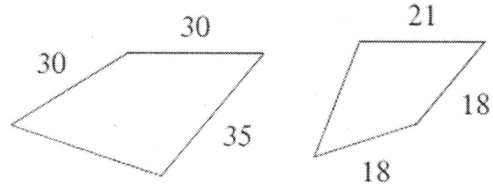
Name _____ Date _____

Find the scale factor of each figure.

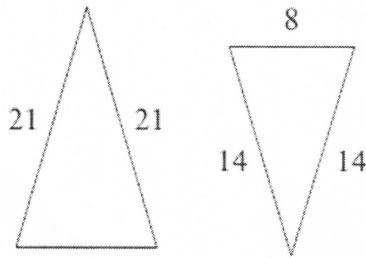
1)



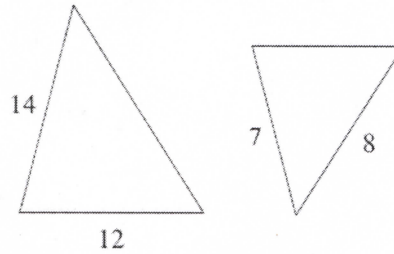
2)



3)



4)



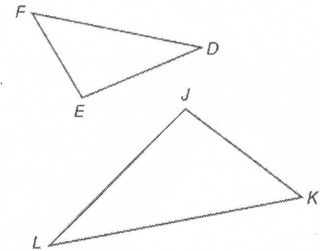
5) Complete the statements.

a) $\angle F \cong$ _____

b) $\angle D \cong$ _____

c) $\angle E \cong$ _____

d) $\triangle FDE \cong$ _____



ANSWERS TO TARGET 6C:

1) $\frac{5}{2}$

2) $\frac{5}{3}$

3) $\frac{3}{2}$

4) $\frac{2}{1}$

5)

a) $\angle K$

b) $\angle L$

c) $\angle J$

d) $\triangle KJL$